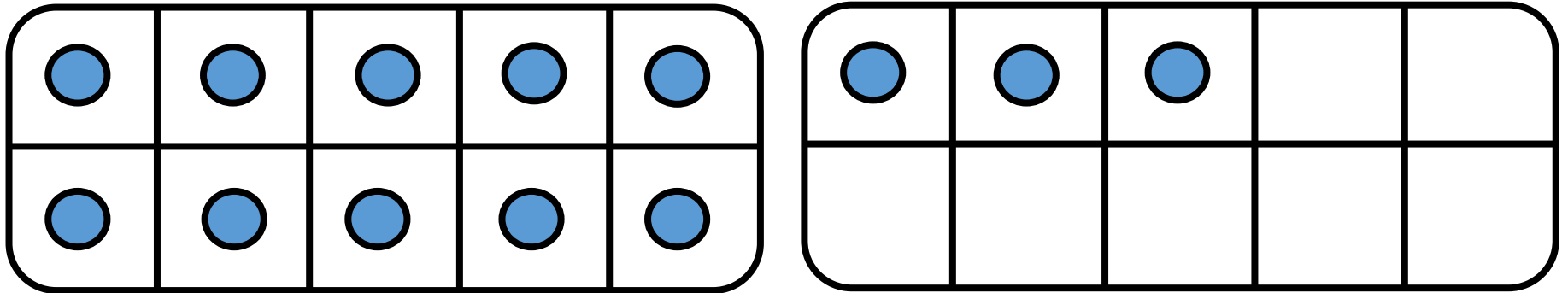




CM24: Connaitre les décompositions de 18, 19 et 20

Combien manque-t-il pour faire 18 ?

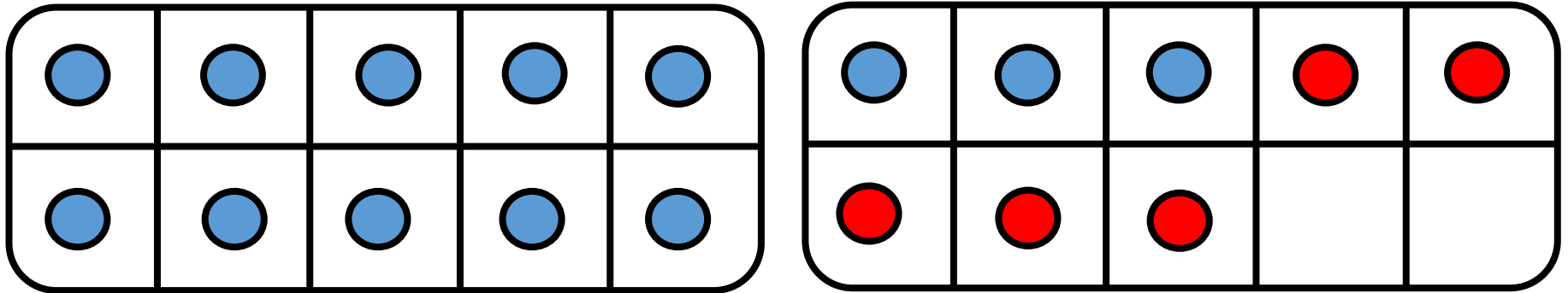


$$18 = \underline{\quad\quad\quad} + 13$$



CM24: Connaitre les décompositions de 18, 19 et 20

Combien manque-t-il pour faire 18 ?

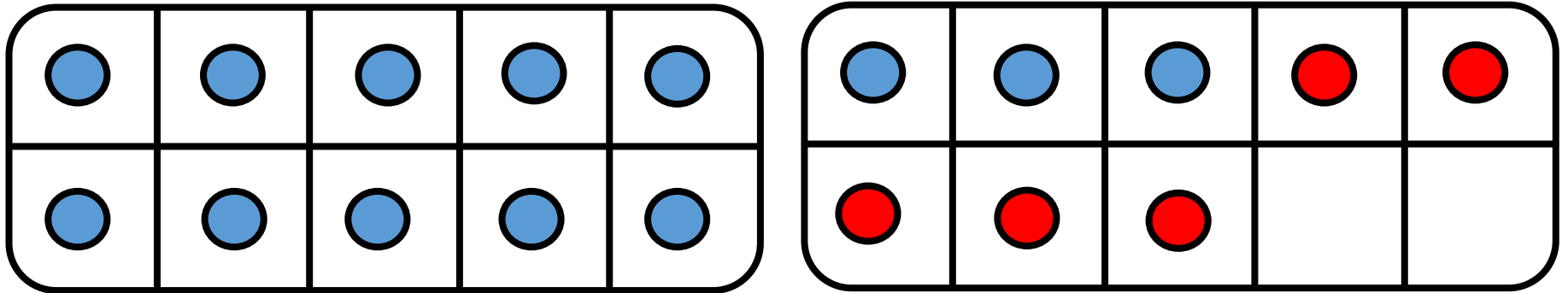


$$18 = \underline{\quad\quad\quad} + 13$$



CM24: Connaitre les décompositions de 18, 19 et 20

Combien manque-t-il pour faire 18 ?

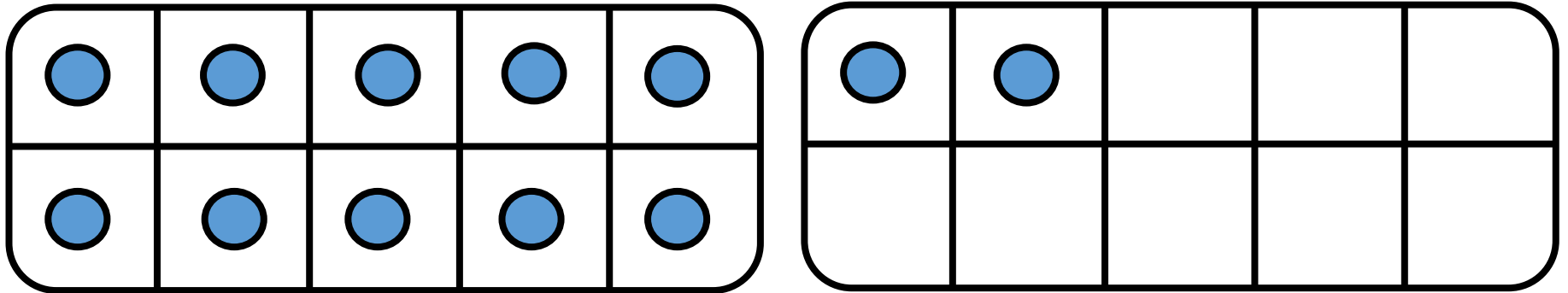


$$18 = \underline{\quad 5 \quad} + 13$$



CM24: Connaitre les décompositions de 18, 19 et 20

Combien manque-t-il pour faire 18 ?

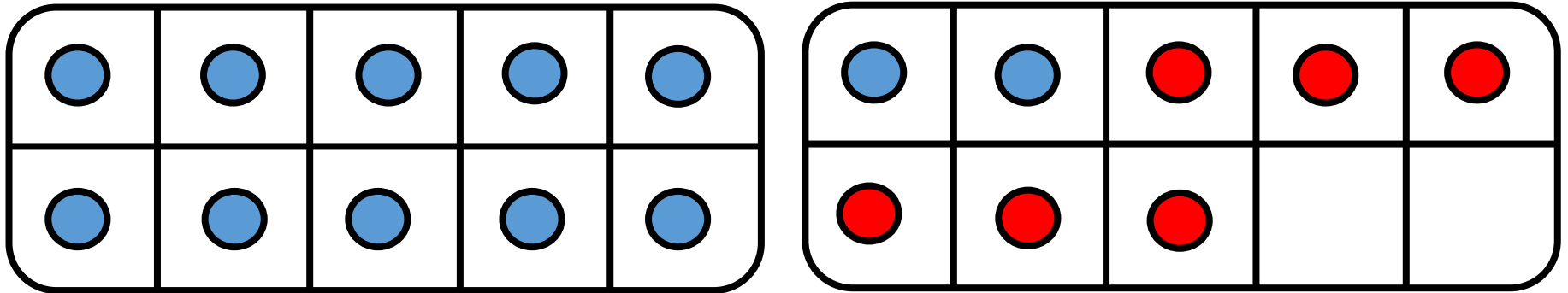


$$18 = \underline{\quad\quad\quad} + 12$$



CM24: Connaitre les décompositions de 18, 19 et 20

Combien manque-t-il pour faire 18 ?

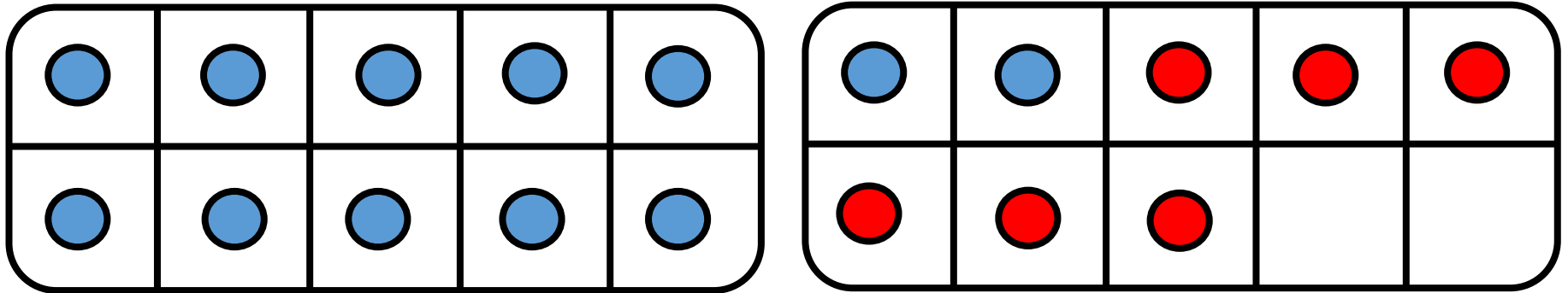


$$18 = \underline{\quad\quad\quad} + 12$$



CM24: Connaitre les décompositions de 18, 19 et 20

Combien manque-t-il pour faire 18 ?

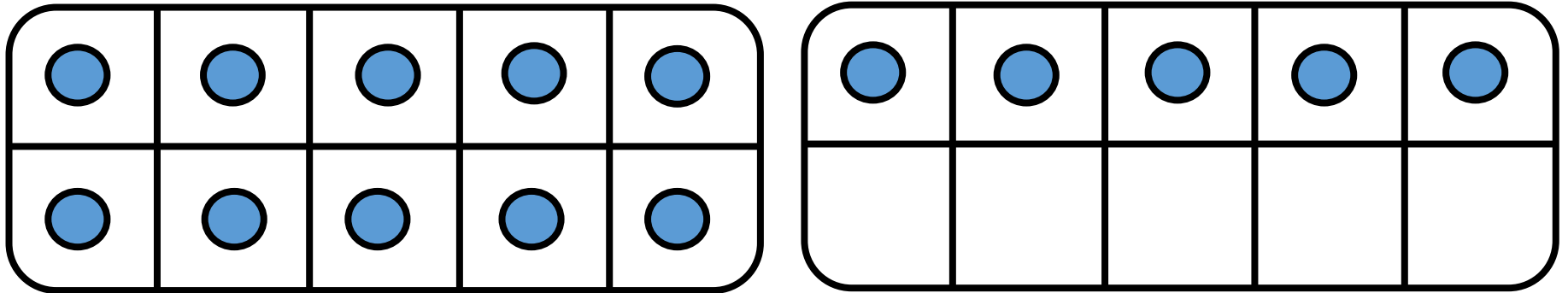


$$18 = \underline{6} + 12$$



CM24: Connaitre les décompositions de 18, 19 et 20

Combien manque-t-il pour faire 19 ?

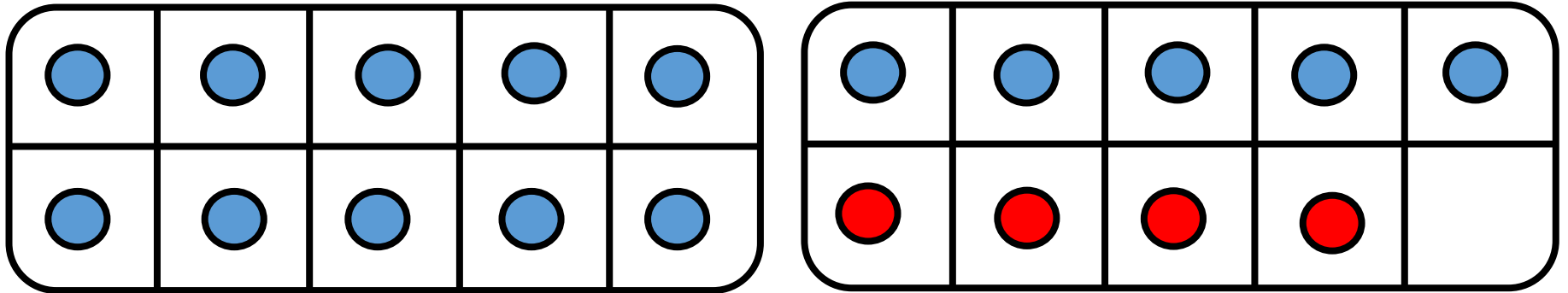


$$19 = \underline{\quad\quad\quad} + 15$$



CM24: Connaitre les décompositions de 18, 19 et 20

Combien manque-t-il pour faire 19 ?

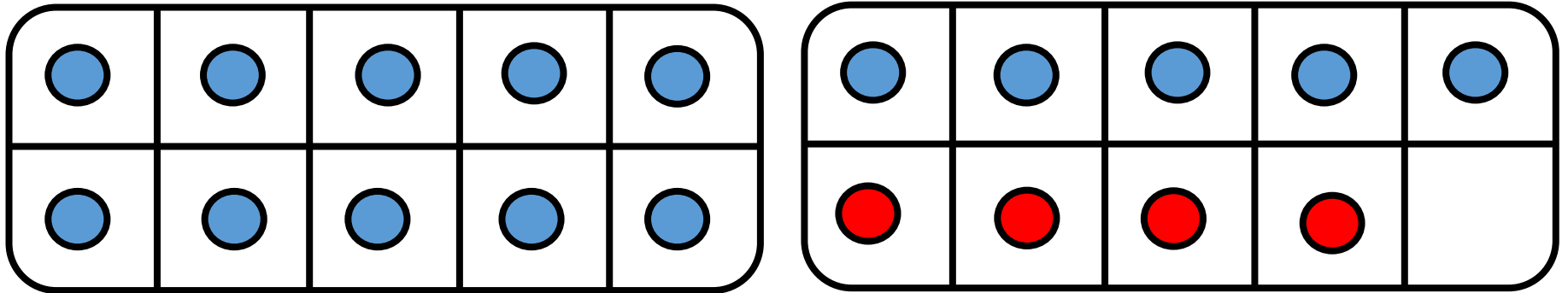


$$19 = \underline{\quad\quad\quad} + 15$$



CM24: Connaitre les décompositions de 18, 19 et 20

Combien manque-t-il pour faire 19 ?

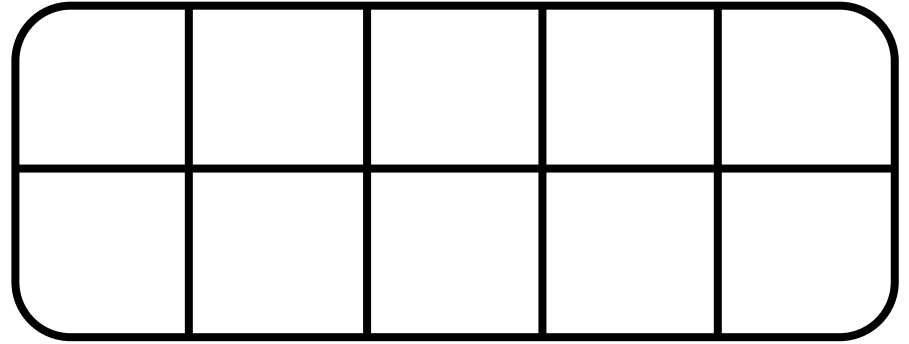
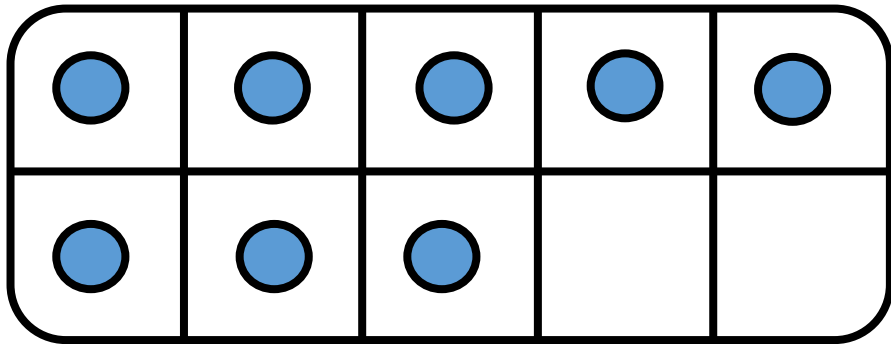


$$19 = \underline{4} + 15$$



CM24: Connaitre les décompositions de 18, 19 et 20

Combien manque-t-il pour faire 19 ?

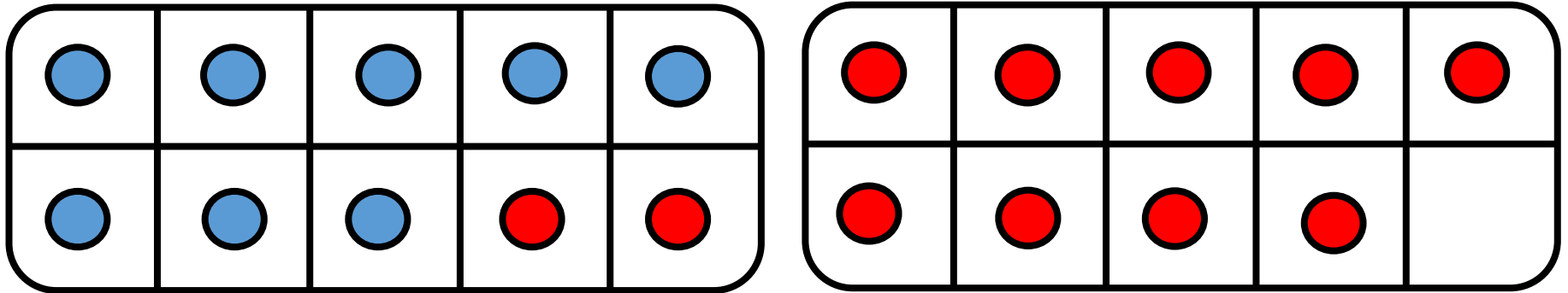


$$19 = \underline{\quad\quad\quad} + 8$$



CM24: Connaitre les décompositions de 18, 19 et 20

Combien manque-t-il pour faire 19 ?

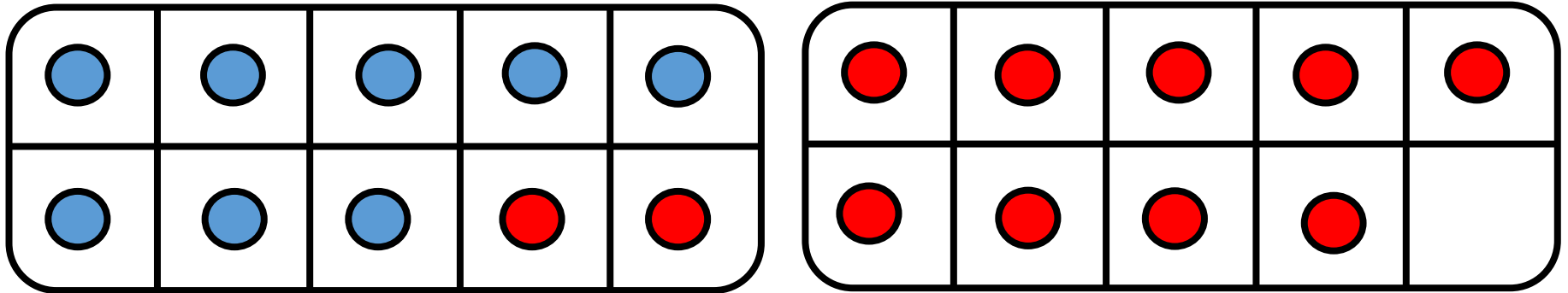


$$19 = \underline{\quad\quad\quad} + 8$$



CM24: Connaitre les décompositions de 18, 19 et 20

Combien manque-t-il pour faire 19 ?

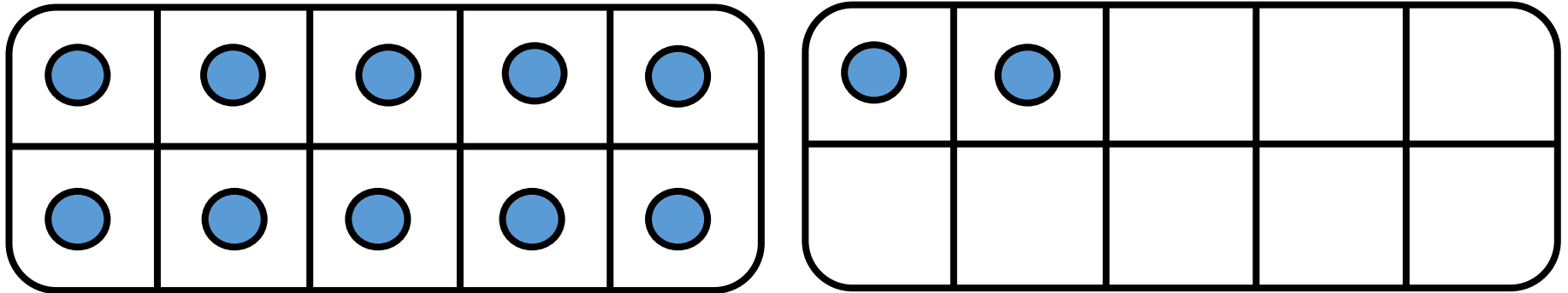


$$19 = \underline{11} + 8$$



CM24: Connaitre les décompositions de 18, 19 et 20

Combien manque-t-il pour faire 20 ?

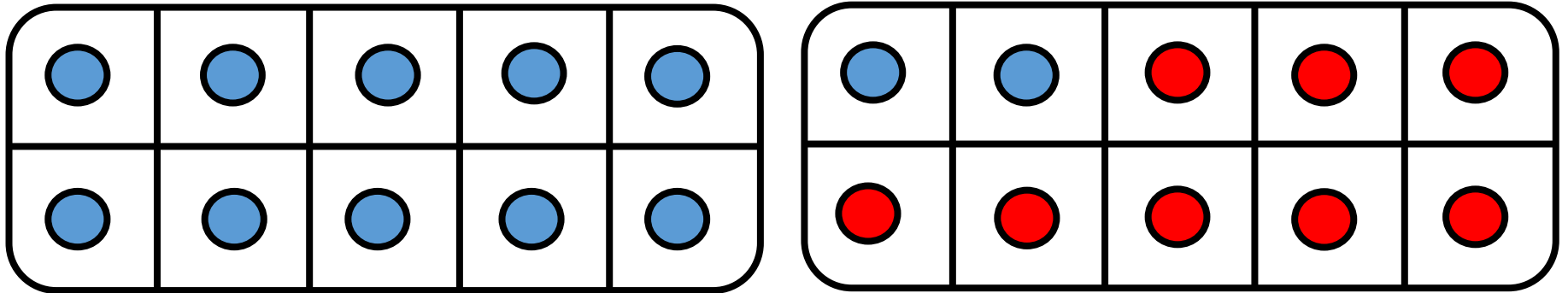


$$20 = \underline{\quad\quad\quad} + 12$$



CM24: Connaitre les décompositions de 18, 19 et 20

Combien manque-t-il pour faire 20 ?

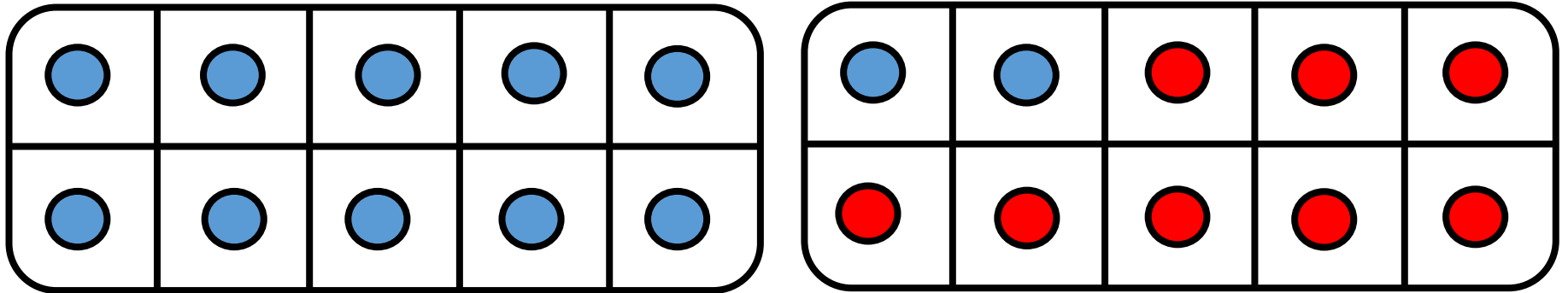


$$20 = \underline{\quad\quad\quad} + 12$$



CM24: Connaitre les décompositions de 18, 19 et 20

Combien manque-t-il pour faire 20 ?


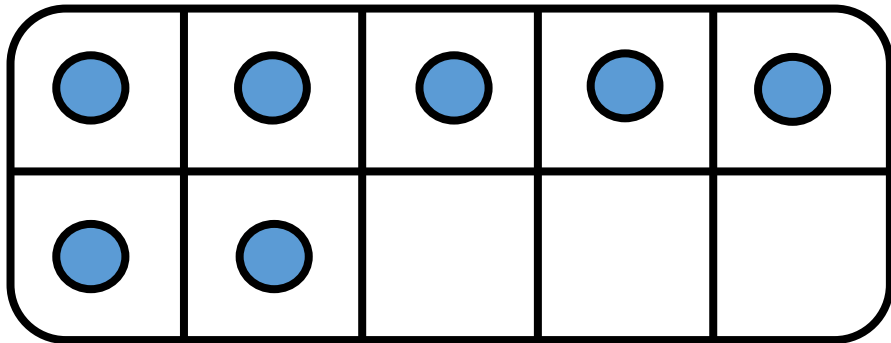


$$20 = \underline{\quad 8 \quad} + 12$$



CM24: Connaitre les décompositions de 18, 19 et 20

Combien manque-t-il pour faire 20 ?

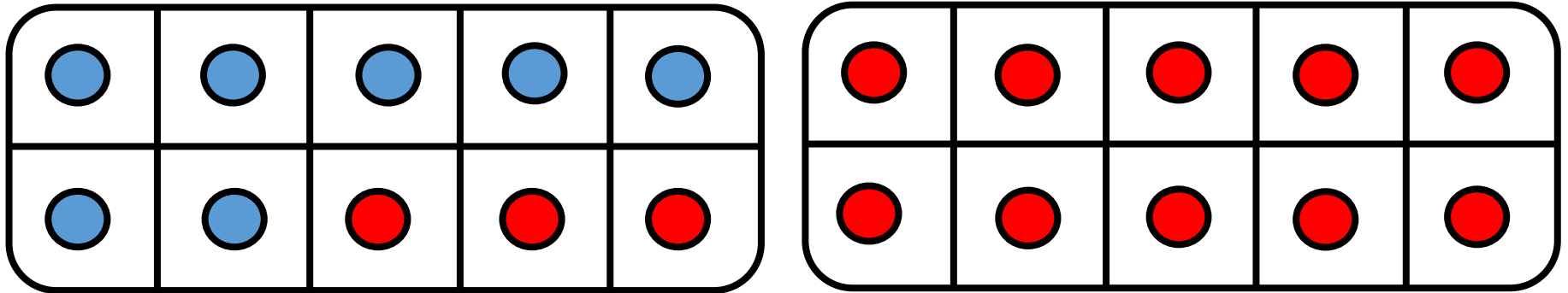


$$20 = \underline{\quad\quad\quad} + 7$$



CM24: Connaitre les décompositions de 18, 19 et 20

Combien manque-t-il pour faire 20 ?

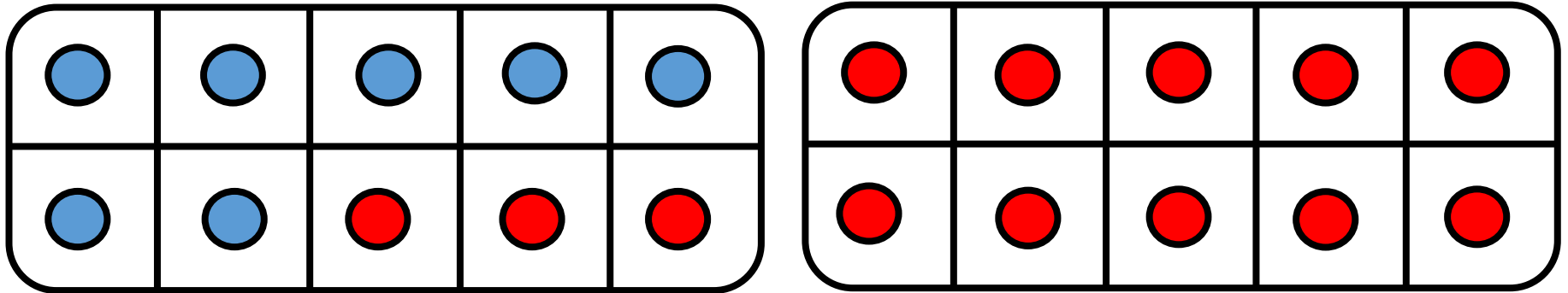


$$20 = \underline{\quad\quad\quad} + 7$$



CM24: Connaitre les décompositions de 18, 19 et 20

Combien manque-t-il pour faire 20 ?



$$20 = \underline{13} + 7$$



CM24: Connaitre les décompositions de 18, 19 et 20

$18 = 0 + 18$	
$18 = 1 + 17$	
$18 = 2 + 16$	
$18 = 3 + 15$	
$18 = 4 + 14$	



CM24: Connaitre les décompositions de 18, 19 et 20

$18 = 0 + 18$	
$18 = 1 + 17$	
$18 = 2 + 16$	
$18 = 3 + 15$	
$18 = 4 + 14$	
$18 = 5 + 13$	



CM24: Connaitre les décompositions de 18, 19 et 20

$18 = 0 + 18$	
$18 = 1 + 17$	
$18 = 2 + 16$	
$18 = 3 + 15$	
$18 = 4 + 14$	
$18 = 5 + 13$	
$18 = 6 + 12$	



CM24: Connaitre les décompositions de 18, 19 et 20

$18 = 0 + 18$	
$18 = 1 + 17$	
$18 = 2 + 16$	
$18 = 3 + 15$	
$18 = 4 + 14$	
$18 = 5 + 13$	
$18 = 6 + 12$	
$18 = 7 + 11$	



CM24: Connaitre les décompositions de 18, 19 et 20

$18 = 0 + 18$	
$18 = 1 + 17$	
$18 = 2 + 16$	
$18 = 3 + 15$	
$18 = 4 + 14$	
$18 = 5 + 13$	
$18 = 6 + 12$	
$18 = 7 + 11$	
$18 = 8 + 10$	



CM24: Connaitre les décompositions de 18, 19 et 20

$18 = 0 + 18$	
$18 = 1 + 17$	
$18 = 2 + 16$	
$18 = 3 + 15$	
$18 = 4 + 14$	
$18 = 5 + 13$	
$18 = 6 + 12$	
$18 = 7 + 11$	
$18 = 8 + 10$	
$18 = 9 + 9$	



CM24: Connaitre les décompositions de 18, 19 et 20

$18 = 0 + 18$	$18 = 10 + 8$
$18 = 1 + 17$	
$18 = 2 + 16$	
$18 = 3 + 15$	
$18 = 4 + 14$	
$18 = 5 + 13$	
$18 = 6 + 12$	
$18 = 7 + 11$	
$18 = 8 + 10$	
$18 = 9 + 9$	



CM24: Connaitre les décompositions de 18, 19 et 20

$18 = 0 + 18$	$18 = 10 + 8$
$18 = 1 + 17$	$18 = 11 + 7$
$18 = 2 + 16$	
$18 = 3 + 15$	
$18 = 4 + 14$	
$18 = 5 + 13$	
$18 = 6 + 12$	
$18 = 7 + 11$	
$18 = 8 + 10$	
$18 = 9 + 9$	



CM24: Connaitre les décompositions de 18, 19 et 20

$18 = 0 + 18$	$18 = 10 + 8$
$18 = 1 + 17$	$18 = 11 + 7$
$18 = 2 + 16$	$18 = 12 + 6$
$18 = 3 + 15$	
$18 = 4 + 14$	
$18 = 5 + 13$	
$18 = 6 + 12$	
$18 = 7 + 11$	
$18 = 8 + 10$	
$18 = 9 + 9$	



CM24: Connaitre les décompositions de 18, 19 et 20

$18 = 0 + 18$	$18 = 10 + 8$
$18 = 1 + 17$	$18 = 11 + 7$
$18 = 2 + 16$	$18 = 12 + 6$
$18 = 3 + 15$	$18 = 13 + 5$
$18 = 4 + 14$	
$18 = 5 + 13$	
$18 = 6 + 12$	
$18 = 7 + 11$	
$18 = 8 + 10$	
$18 = 9 + 9$	



CM24: Connaitre les décompositions de 18, 19 et 20

$18 = 0 + 18$	$18 = 10 + 8$
$18 = 1 + 17$	$18 = 11 + 7$
$18 = 2 + 16$	$18 = 12 + 6$
$18 = 3 + 15$	$18 = 13 + 5$
$18 = 4 + 14$	$18 = 14 + 4$
$18 = 5 + 13$	
$18 = 6 + 12$	
$18 = 7 + 11$	
$18 = 8 + 10$	
$18 = 9 + 9$	



CM24: Connaitre les décompositions de 18, 19 et 20

$18 = 0 + 18$	$18 = 10 + 8$
$18 = 1 + 17$	$18 = 11 + 7$
$18 = 2 + 16$	$18 = 12 + 6$
$18 = 3 + 15$	$18 = 13 + 5$
$18 = 4 + 14$	$18 = 14 + 4$
$18 = 5 + 13$	$18 = 15 + 3$
$18 = 6 + 12$	
$18 = 7 + 11$	
$18 = 8 + 10$	
$18 = 9 + 9$	



CM24: Connaitre les décompositions de 18, 19 et 20

$18 = 0 + 18$	$18 = 10 + 8$
$18 = 1 + 17$	$18 = 11 + 7$
$18 = 2 + 16$	$18 = 12 + 6$
$18 = 3 + 15$	$18 = 13 + 5$
$18 = 4 + 14$	$18 = 14 + 4$
$18 = 5 + 13$	$18 = 15 + 3$
$18 = 6 + 12$	$18 = 16 + 2$
$18 = 7 + 11$	
$18 = 8 + 10$	
$18 = 9 + 9$	



CM24: Connaitre les décompositions de 18, 19 et 20

$18 = 0 + 18$	$18 = 10 + 8$
$18 = 1 + 17$	$18 = 11 + 7$
$18 = 2 + 16$	$18 = 12 + 6$
$18 = 3 + 15$	$18 = 13 + 5$
$18 = 4 + 14$	$18 = 14 + 4$
$18 = 5 + 13$	$18 = 15 + 3$
$18 = 6 + 12$	$18 = 16 + 2$
$18 = 7 + 11$	$18 = 17 + 1$
$18 = 8 + 10$	
$18 = 9 + 9$	



CM24: Connaitre les décompositions de 18, 19 et 20

$18 = 0 + 18$	$18 = 10 + 8$
$18 = 1 + 17$	$18 = 11 + 7$
$18 = 2 + 16$	$18 = 12 + 6$
$18 = 3 + 15$	$18 = 13 + 5$
$18 = 4 + 14$	$18 = 14 + 4$
$18 = 5 + 13$	$18 = 15 + 3$
$18 = 6 + 12$	$18 = 16 + 2$
$18 = 7 + 11$	$18 = 17 + 1$
$18 = 8 + 10$	$18 = 18 + 0$
$18 = 9 + 9$	



CM24: Connaitre les décompositions de 18, 19 et 20

$19 = 0 + 19$	
$19 = 1 + 18$	
$19 = 2 + 17$	
$19 = 3 + 16$	
$19 = 4 + 15$	
$19 = 5 + 14$	



CM24: Connaitre les décompositions de 18, 19 et 20

$19 = 0 + 19$	
$19 = 1 + 18$	
$19 = 2 + 17$	
$19 = 3 + 16$	
$19 = 4 + 15$	
$19 = 5 + 14$	
$19 = 6 + 13$	



CM24: Connaitre les décompositions de 18, 19 et 20

$19 = 0 + 19$	
$19 = 1 + 18$	
$19 = 2 + 17$	
$19 = 3 + 16$	
$19 = 4 + 15$	
$19 = 5 + 14$	
$19 = 6 + 13$	
$19 = 7 + 12$	



CM24: Connaitre les décompositions de 18, 19 et 20

$19 = 0 + 19$	
$19 = 1 + 18$	
$19 = 2 + 17$	
$19 = 3 + 16$	
$19 = 4 + 15$	
$19 = 5 + 14$	
$19 = 6 + 13$	
$19 = 7 + 12$	
$19 = 8 + 11$	



CM24: Connaitre les décompositions de 18, 19 et 20

$19 = 0 + 19$	
$19 = 1 + 18$	
$19 = 2 + 17$	
$19 = 3 + 16$	
$19 = 4 + 15$	
$19 = 5 + 14$	
$19 = 6 + 13$	
$19 = 7 + 12$	
$19 = 8 + 11$	
$19 = 9 + 10$	



CM24: Connaitre les décompositions de 18, 19 et 20

$19 = 0 + 19$	$19 = 10 + 9$
$19 = 1 + 18$	
$19 = 2 + 17$	
$19 = 3 + 16$	
$19 = 4 + 15$	
$19 = 5 + 14$	
$19 = 6 + 13$	
$19 = 7 + 12$	
$19 = 8 + 11$	
$19 = 9 + 10$	



CM24: Connaitre les décompositions de 18, 19 et 20

$19 = 0 + 19$	$19 = 10 + 9$
$19 = 1 + 18$	$19 = 11 + 8$
$19 = 2 + 17$	
$19 = 3 + 16$	
$19 = 4 + 15$	
$19 = 5 + 14$	
$19 = 6 + 13$	
$19 = 7 + 12$	
$19 = 8 + 11$	
$19 = 9 + 10$	



CM24: Connaitre les décompositions de 18, 19 et 20

$19 = 0 + 19$	$19 = 10 + 9$
$19 = 1 + 18$	$19 = 11 + 8$
$19 = 2 + 17$	$19 = 12 + 7$
$19 = 3 + 16$	
$19 = 4 + 15$	
$19 = 5 + 14$	
$19 = 6 + 13$	
$19 = 7 + 12$	
$19 = 8 + 11$	
$19 = 9 + 10$	



CM24: Connaitre les décompositions de 18, 19 et 20

$19 = 0 + 19$	$19 = 10 + 9$
$19 = 1 + 18$	$19 = 11 + 8$
$19 = 2 + 17$	$19 = 12 + 7$
$19 = 3 + 16$	$19 = 13 + 6$
$19 = 4 + 15$	
$19 = 5 + 14$	
$19 = 6 + 13$	
$19 = 7 + 12$	
$19 = 8 + 11$	
$19 = 9 + 10$	



CM24: Connaitre les décompositions de 18, 19 et 20

$19 = 0 + 19$	$19 = 10 + 9$
$19 = 1 + 18$	$19 = 11 + 8$
$19 = 2 + 17$	$19 = 12 + 7$
$19 = 3 + 16$	$19 = 13 + 6$
$19 = 4 + 15$	$19 = 14 + 5$
$19 = 5 + 14$	
$19 = 6 + 13$	
$19 = 7 + 12$	
$19 = 8 + 11$	
$19 = 9 + 10$	



CM24: Connaitre les décompositions de 18, 19 et 20

$19 = 0 + 19$	$19 = 10 + 9$
$19 = 1 + 18$	$19 = 11 + 8$
$19 = 2 + 17$	$19 = 12 + 7$
$19 = 3 + 16$	$19 = 13 + 6$
$19 = 4 + 15$	$19 = 14 + 5$
$19 = 5 + 14$	$19 = 15 + 4$
$19 = 6 + 13$	
$19 = 7 + 12$	
$19 = 8 + 11$	
$19 = 9 + 10$	



CM24: Connaitre les décompositions de 18, 19 et 20

$19 = 0 + 19$	$19 = 10 + 9$
$19 = 1 + 18$	$19 = 11 + 8$
$19 = 2 + 17$	$19 = 12 + 7$
$19 = 3 + 16$	$19 = 13 + 6$
$19 = 4 + 15$	$19 = 14 + 5$
$19 = 5 + 14$	$19 = 15 + 4$
$19 = 6 + 13$	$19 = 16 + 3$
$19 = 7 + 12$	
$19 = 8 + 11$	
$19 = 9 + 10$	



CM24: Connaitre les décompositions de 18, 19 et 20

$19 = 0 + 19$	$19 = 10 + 9$
$19 = 1 + 18$	$19 = 11 + 8$
$19 = 2 + 17$	$19 = 12 + 7$
$19 = 3 + 16$	$19 = 13 + 6$
$19 = 4 + 15$	$19 = 14 + 5$
$19 = 5 + 14$	$19 = 15 + 4$
$19 = 6 + 13$	$19 = 16 + 3$
$19 = 7 + 12$	$19 = 17 + 2$
$19 = 8 + 11$	
$19 = 9 + 10$	



CM24: Connaitre les décompositions de 18, 19 et 20

$19 = 0 + 19$	$19 = 10 + 9$
$19 = 1 + 18$	$19 = 11 + 8$
$19 = 2 + 17$	$19 = 12 + 7$
$19 = 3 + 16$	$19 = 13 + 6$
$19 = 4 + 15$	$19 = 14 + 5$
$19 = 5 + 14$	$19 = 15 + 4$
$19 = 6 + 13$	$19 = 16 + 3$
$19 = 7 + 12$	$19 = 17 + 2$
$19 = 8 + 11$	$19 = 18 + 1$
$19 = 9 + 10$	



CM24: Connaitre les décompositions de 18, 19 et 20

$19 = 0 + 19$	$19 = 10 + 9$
$19 = 1 + 18$	$19 = 11 + 8$
$19 = 2 + 17$	$19 = 12 + 7$
$19 = 3 + 16$	$19 = 13 + 6$
$19 = 4 + 15$	$19 = 14 + 5$
$19 = 5 + 14$	$19 = 15 + 4$
$19 = 6 + 13$	$19 = 16 + 3$
$19 = 7 + 12$	$19 = 17 + 2$
$19 = 8 + 11$	$19 = 18 + 1$
$19 = 9 + 10$	$19 = 19 + 0$



CM24: Connaitre les décompositions de 18, 19 et 20

$20 = 0 + 20$	
$20 = 1 + 19$	
$20 = 2 + 18$	
$20 = 3 + 17$	
$20 = 4 + 16$	
$20 = 5 + 15$	
$20 = 6 + 14$	



CM24: Connaitre les décompositions de 18, 19 et 20

$20 = 0 + 20$	
$20 = 1 + 19$	
$20 = 2 + 18$	
$20 = 3 + 17$	
$20 = 4 + 16$	
$20 = 5 + 15$	
$20 = 6 + 14$	
$20 = 7 + 13$	



CM24: Connaitre les décompositions de 18, 19 et 20

$20 = 0 + 20$	
$20 = 1 + 19$	
$20 = 2 + 18$	
$20 = 3 + 17$	
$20 = 4 + 16$	
$20 = 5 + 15$	
$20 = 6 + 14$	
$20 = 7 + 13$	
$20 = 8 + 12$	



CM24: Connaitre les décompositions de 18, 19 et 20

$20 = 0 + 20$	
$20 = 1 + 19$	
$20 = 2 + 18$	
$20 = 3 + 17$	
$20 = 4 + 16$	
$20 = 5 + 15$	
$20 = 6 + 14$	
$20 = 7 + 13$	
$20 = 8 + 12$	
$20 = 9 + 11$	



CM24: Connaitre les décompositions de 18, 19 et 20

$20 = 0 + 20$	
$20 = 1 + 19$	
$20 = 2 + 18$	
$20 = 3 + 17$	
$20 = 4 + 16$	
$20 = 5 + 15$	
$20 = 6 + 14$	
$20 = 7 + 13$	
$20 = 8 + 12$	
$20 = 9 + 11$	
$20 = 10 + 10$	



CM24: Connaitre les décompositions de 18, 19 et 20

$20 = 0 + 20$	$20 = 11 + 9$
$20 = 1 + 19$	
$20 = 2 + 18$	
$20 = 3 + 17$	
$20 = 4 + 16$	
$20 = 5 + 15$	
$20 = 6 + 14$	
$20 = 7 + 13$	
$20 = 8 + 12$	
$20 = 9 + 11$	
$20 = 10 + 10$	



CM24: Connaitre les décompositions de 18, 19 et 20

$20 = 0 + 20$	$20 = 11 + 9$
$20 = 1 + 19$	$20 = 12 + 8$
$20 = 2 + 18$	
$20 = 3 + 17$	
$20 = 4 + 16$	
$20 = 5 + 15$	
$20 = 6 + 14$	
$20 = 7 + 13$	
$20 = 8 + 12$	
$20 = 9 + 11$	
$20 = 10 + 10$	



CM24: Connaitre les décompositions de 18, 19 et 20

$20 = 0 + 20$	$20 = 11 + 9$
$20 = 1 + 19$	$20 = 12 + 8$
$20 = 2 + 18$	$20 = 13 + 7$
$20 = 3 + 17$	
$20 = 4 + 16$	
$20 = 5 + 15$	
$20 = 6 + 14$	
$20 = 7 + 13$	
$20 = 8 + 12$	
$20 = 9 + 11$	
$20 = 10 + 10$	



CM24: Connaitre les décompositions de 18, 19 et 20

$20 = 0 + 20$	$20 = 11 + 9$
$20 = 1 + 19$	$20 = 12 + 8$
$20 = 2 + 18$	$20 = 13 + 7$
$20 = 3 + 17$	$20 = 14 + 6$
$20 = 4 + 16$	
$20 = 5 + 15$	
$20 = 6 + 14$	
$20 = 7 + 13$	
$20 = 8 + 12$	
$20 = 9 + 11$	
$20 = 10 + 10$	



CM24: Connaitre les décompositions de 18, 19 et 20

$20 = 0 + 20$	$20 = 11 + 9$
$20 = 1 + 19$	$20 = 12 + 8$
$20 = 2 + 18$	$20 = 13 + 7$
$20 = 3 + 17$	$20 = 14 + 6$
$20 = 4 + 16$	$20 = 15 + 5$
$20 = 5 + 15$	
$20 = 6 + 14$	
$20 = 7 + 13$	
$20 = 8 + 12$	
$20 = 9 + 11$	
$20 = 10 + 10$	



CM24: Connaitre les décompositions de 18, 19 et 20

$20 = 0 + 20$	$20 = 11 + 9$
$20 = 1 + 19$	$20 = 12 + 8$
$20 = 2 + 18$	$20 = 13 + 7$
$20 = 3 + 17$	$20 = 14 + 6$
$20 = 4 + 16$	$20 = 15 + 5$
$20 = 5 + 15$	$20 = 16 + 4$
$20 = 6 + 14$	
$20 = 7 + 13$	
$20 = 8 + 12$	
$20 = 9 + 11$	
$20 = 10 + 10$	



CM24: Connaitre les décompositions de 18, 19 et 20

$20 = 0 + 20$	$20 = 11 + 9$
$20 = 1 + 19$	$20 = 12 + 8$
$20 = 2 + 18$	$20 = 13 + 7$
$20 = 3 + 17$	$20 = 14 + 6$
$20 = 4 + 16$	$20 = 15 + 5$
$20 = 5 + 15$	$20 = 16 + 4$
$20 = 6 + 14$	$20 = 17 + 3$
$20 = 7 + 13$	
$20 = 8 + 12$	
$20 = 9 + 11$	
$20 = 10 + 10$	



CM24: Connaitre les décompositions de 18, 19 et 20

$20 = 0 + 20$	$20 = 11 + 9$
$20 = 1 + 19$	$20 = 12 + 8$
$20 = 2 + 18$	$20 = 13 + 7$
$20 = 3 + 17$	$20 = 14 + 6$
$20 = 4 + 16$	$20 = 15 + 5$
$20 = 5 + 15$	$20 = 16 + 4$
$20 = 6 + 14$	$20 = 17 + 3$
$20 = 7 + 13$	$20 = 18 + 2$
$20 = 8 + 12$	
$20 = 9 + 11$	
$20 = 10 + 10$	



CM24: Connaitre les décompositions de 18, 19 et 20

$20 = 0 + 20$	$20 = 11 + 9$
$20 = 1 + 19$	$20 = 12 + 8$
$20 = 2 + 18$	$20 = 13 + 7$
$20 = 3 + 17$	$20 = 14 + 6$
$20 = 4 + 16$	$20 = 15 + 5$
$20 = 5 + 15$	$20 = 16 + 4$
$20 = 6 + 14$	$20 = 17 + 3$
$20 = 7 + 13$	$20 = 18 + 2$
$20 = 8 + 12$	$20 = 19 + 1$
$20 = 9 + 11$	
$20 = 10 + 10$	



CM24: Connaitre les décompositions de 18, 19 et 20

$20 = 0 + 20$	$20 = 11 + 9$
$20 = 1 + 19$	$20 = 12 + 8$
$20 = 2 + 18$	$20 = 13 + 7$
$20 = 3 + 17$	$20 = 14 + 6$
$20 = 4 + 16$	$20 = 15 + 5$
$20 = 5 + 15$	$20 = 16 + 4$
$20 = 6 + 14$	$20 = 17 + 3$
$20 = 7 + 13$	$20 = 18 + 2$
$20 = 8 + 12$	$20 = 19 + 1$
$20 = 9 + 11$	$20 = 20 + 0$
$20 = 10 + 10$	